

Find a raffle ticket in the box that goes between the two tickets.
Match or write.



65	83	46	29	24
18	99	80	72	51

43		48	17		21
79		82	85		100
19		27	24		40
60		70	67		80
82		98	49		59

This page is licensed to be used by Windsor Hill Primary School only.

On each butterfly, colour the smaller number red and the greater number blue.




15	11	80	48	36	32	81	28
87	56	52	42	29	67	47	74
						26	76


Write the **even** numbers between



Write **two** numbers between

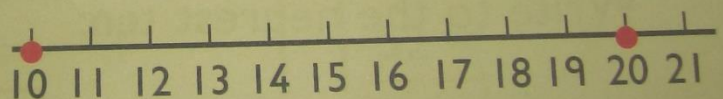


Write numbers between

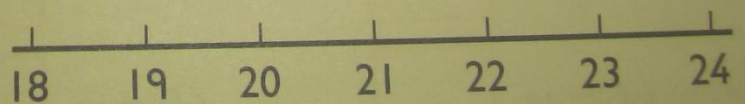


Write the number halfway between

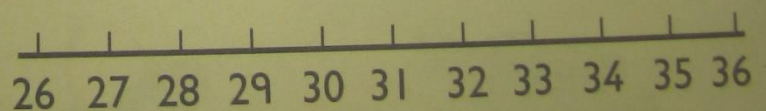
10 and 20 →




19 and 23 →



26 and 34 →



31 and 37 →



Superhero Themed Rounding to 10

Round the numbers below to the nearest 10. The first one has been done for you.

52 → 50

55 → ____

68 → ____

41 → ____

25 → ____

91 → ____

39 → ____

54 → ____

16 → ____

27 → ____

89 → ____

94 → ____

52 → ____

88 → ____



Can you round these two-digit numbers to the nearest 10? Use the number lines to help you.



28 to the nearest 10 = 30



1. 32 to the nearest 10 = _____



2. 46 to the nearest 10 = _____



3. 54 to the nearest 10 = _____



4. 66 to the nearest 10 = _____



5. 71 to the nearest 10 = _____



6. 88 to the nearest 10 = _____



7. 93 to the nearest 10 = _____



8. 45 to the nearest 10 = _____

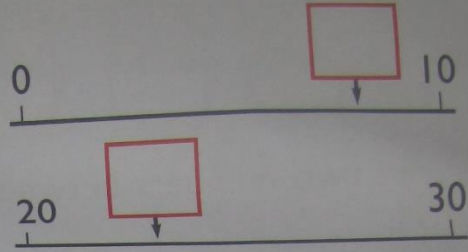
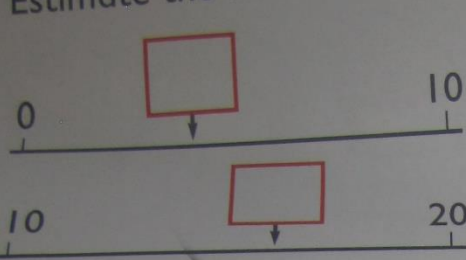


9. 44 to the nearest 10 = _____


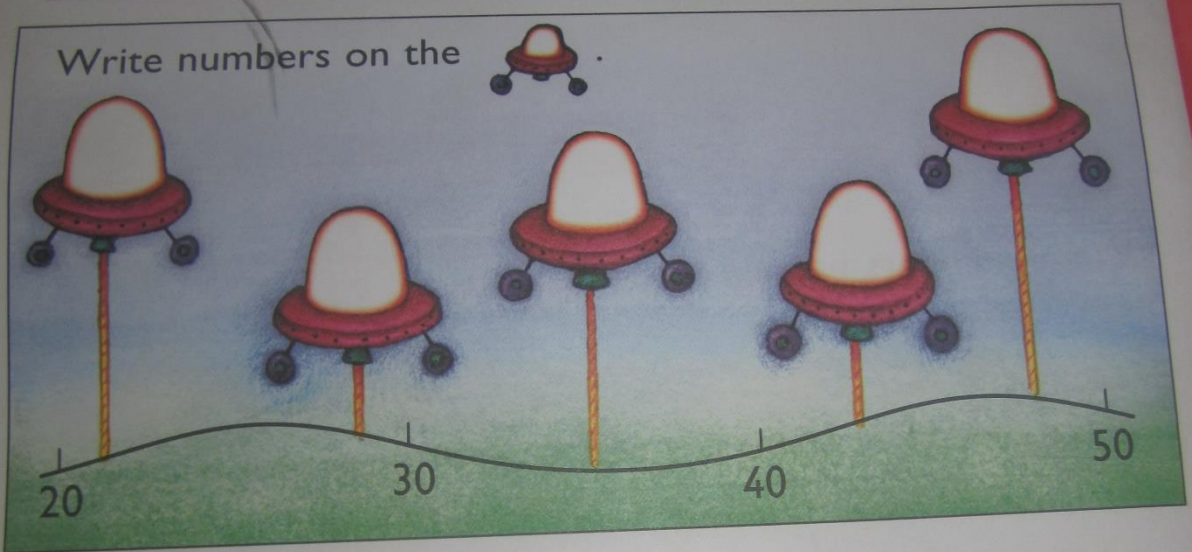


10. 76 to the nearest 10 = _____

Estimate the numbers.



Write numbers on the



Write to the nearest ten:

53 →

57 →

44 →

66 →

48 →

62 →

